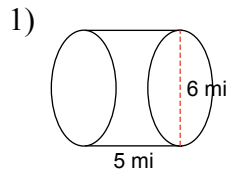
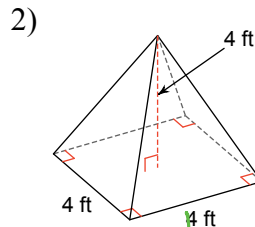
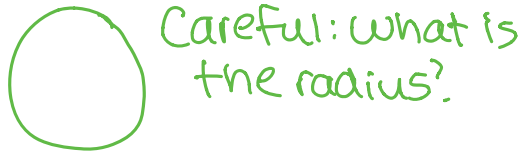


Extra Practice with Volume

Find the volume of each figure to the nearest tenth



Hint:
Find the area of the base first:



Hint:
Find area of base.
Don't forget to divide by 3!

